


## 1. Kus erinevad loomad elavad?

Lõika lisast pildid välja ja kleebi.



## 2. Kirjuta, millised loomad toituvad taimedest ja millised teistest loomadest.

Taimtoidulised loomad

Loomtoidulised loomad

---

---

---

---

---

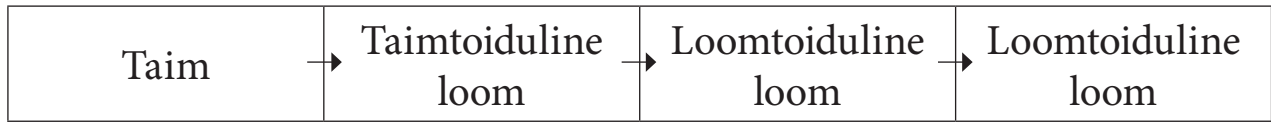
---

---

---

### 3. Toiduahel näitab, kuidas looduses toitu saadakse.

Toiduahelaid moodustavad:



Koosta piltidest toiduahel. Kleebi lisast pildid õigesse kohta.



Koosta ise toiduahel.

---



---

### 4. Vali lausesse kas O<sub>2</sub> (hapnik) või CO<sub>2</sub> (süsihappegaas).

Taimed toodavad \_\_\_ rohkem, kui ise elu jooksul vajavad.

Ülejäänud \_\_\_ läheb atmosfääri (õhku).

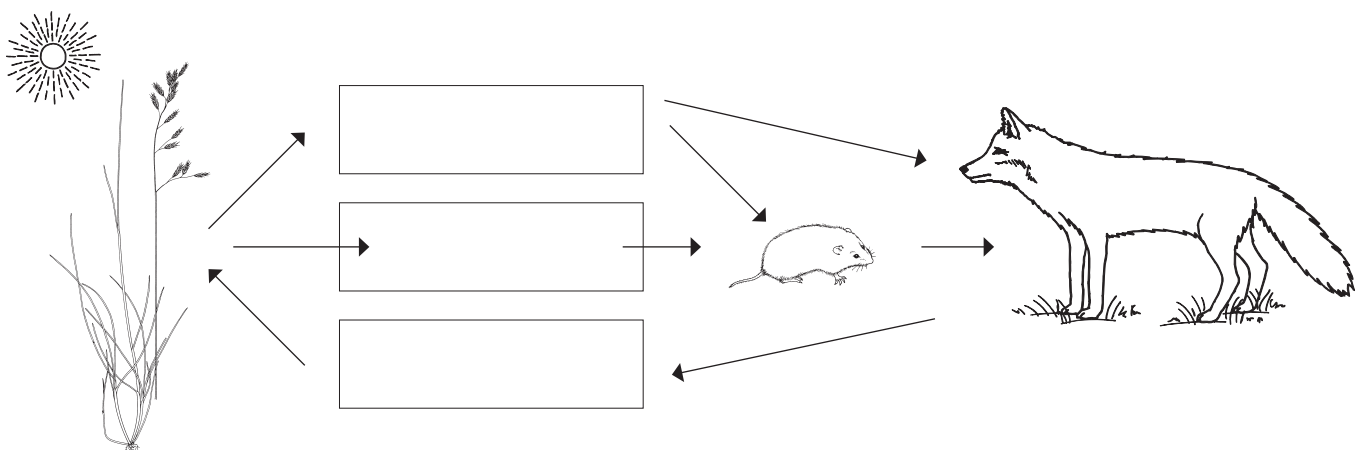
Loomad kasutavad \_\_\_ hingamiseks.

Loomad ja taimed eritavad õhku \_\_\_ .


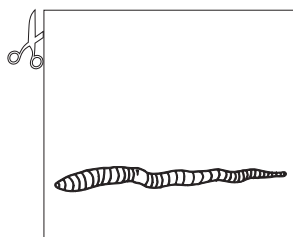

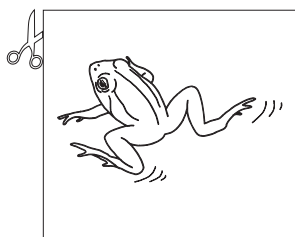




Taimed kasutavad \_\_\_ orgaanilise aine tegemiseks.

Valguse abil orgaanilise aine tegemine on **fotosüntees**.

### 5. Täienda skeemi. Vali õige sõna: O<sub>2</sub>, orgaaniline aine, CO<sub>2</sub>.



## 1. Kus erinevad loomad elavad?



## 3. Toiduahel.

